

Topic 16 Test

Form A

Please complete this test on your own.
Make sure to read all the directions!

What is the total amount?

1



10¢



37¢



41¢



47¢



What is the total amount?

2



85¢



95¢



82¢




99¢



Which coin has the greatest value?

3



dime



nickel



quarter




half-dollar



Free Response Test

Count on to find the total amount.

1.



| |
|-----------------|
| Total Amount |
| |

2.



| |
|-----------------|
| Total Amount |
| |

3. Write the total amounts and compare them.

Write $>$, $<$, or $=$.




_____ ○ _____

4. Jonah needs 35¢.
Find all the ways he
can make 35¢.
Circle the way that
uses the fewest
number of coins.

| Quarter | Dime | Nickel | Total Amount |
|----------|------|--------|--------------|
| / | | | 35¢ |
| / | | | 35¢ |
| X | | | 35¢ |
| | | | 35¢ |
| | | | 35¢ |

5. Julio has 3 coins that total 65¢ .
He has a half dollar and a dime.
Draw the third coin he has.
-

6. Rosalie has these coins:



Draw the coins she needs to make a dollar.

7. Steven has these coins:



He needs 82¢ to buy a toy train. Draw the coins he needs to buy the train.

8. Octavia has 4 coins in her pocket. The coins total 26¢ .
Draw the coins Octavia has.

Please send pictures of your test to Ms. Lim and keep your copy. You will be grading your test and making test corrections tomorrow!