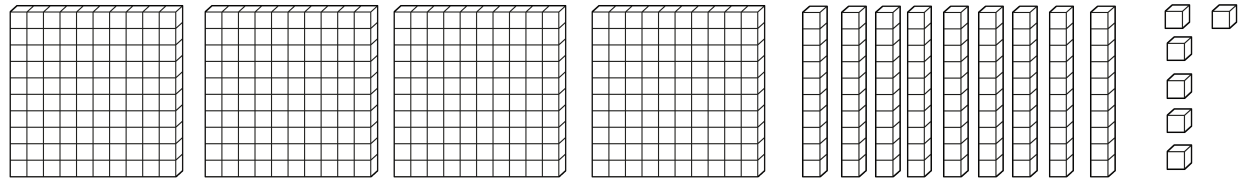


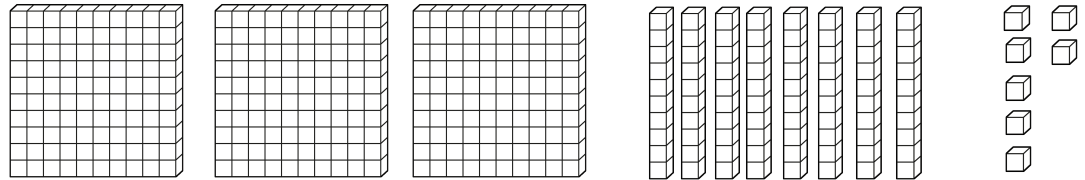
Watch the Khan Academy video lesson then answer these questions.
 Use the base ten blocks to help you.

17-4 Three Digit Subtraction Without Regrouping

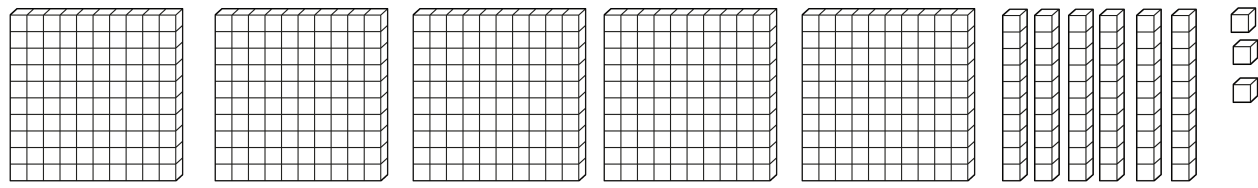
1. $496 - 275 =$ _____



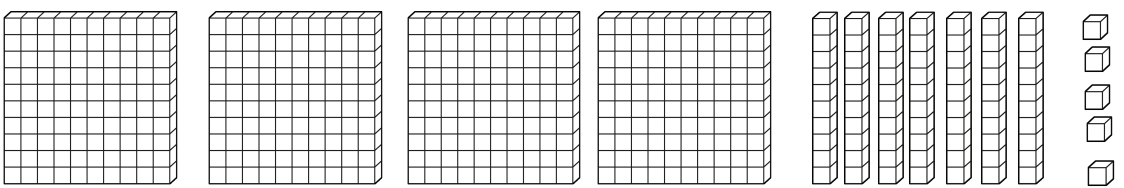
2. $387 - 334 =$ _____



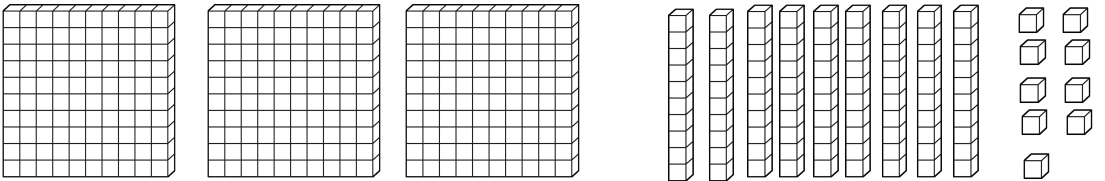
3. $563 - 350 =$ _____



4. $475 - 375 =$ _____



5. $399 - 296 =$ _____



Draw base ten blocks to help you if you need. (100 = square, 10 = line, 1 = dot)

6. $557 - 245 = \underline{\hspace{2cm}}$

7. $678 - 340 = \underline{\hspace{2cm}}$

8. $289 - 108 = \underline{\hspace{2cm}}$

9. $365 - 264 = \underline{\hspace{2cm}}$

10. $588 - 125 = \underline{\hspace{2cm}}$

11. $594 - 512 = \underline{\hspace{2cm}}$

12. $324 - 223 = \underline{\hspace{2cm}}$