

16-6

One Dollar



Watch video lesson on Class Dojo. Then answer these questions on a separate sheet of paper.

Guided Practice

Count on to find the total amount.

1.



\$1.00



\$1.50







Total Amount

2.













Total Amount

3.
















Total Amount

Independent Practice



Count on to find the total amount.

4.



Total
Amount

5.



Total
Amount

6.



Total
Amount

Algebra What 2 coins will make this true?

7.






\$2.00
Total
Amount

Problem Solving

Draw a picture to solve.

8. Zoe saves money in a piggy bank. She has 2 one-dollar bills. She also has 3 quarters and 2 dimes. How much money does Zoe have?



9. Ali takes money to the fair. The money he takes is shown. How much money does Ali take to the fair?



\$1.38



\$1.88




\$2.88



\$3.38



10.  **Journal** Draw 1 dollar bill and 4 coins. Label each coin. Write the total amount.

