

16-5

Ways to Show the  
Same Amount



Answer these questions on a separate sheet of paper.

### Guided Practice


Use coins to show \$1.00.

Draw the coins.

Write the number of coins.


1. Use only half-dollars.

\_\_\_\_\_ half-dollars = \$1.00




2. Use only quarters.

\_\_\_\_\_ quarters = \$1.00



3. Use only dimes.

\_\_\_\_\_ dimes = \$1.00





## Independent Practice

Write each total amount.

Circle sets of coins that equal \$1.00.

## Word Bank

dollar bill

dollar sign


dollar coin

decimal point

4.



5.





6.



**Reasoning** Draw the coin that makes the set equal to \$1.00.

7.






## Problem Solving


Draw a picture to solve.

8. Ed shows 80¢ with 3 coins.

Which coins does he use?



9. Stella has these coins.



How much more money does she need to make one dollar?

20¢



25¢




30¢



35¢



10.  **Journal** Draw \$1.00 using coins.

