

16-4

Comparing Collections of Coins



Watch video lesson on Class Dojo. Then answer these questions on a separate sheet of paper.

Guided Practice

Write the total amounts and compare them.

Write $>$, $<$, or $=$.

1.



21¢ $<$ 40¢




2.



_____ ○ _____



3.



_____ ○ _____



Independent Practice

Write the total amounts and compare them.

Write $>$, $<$, or $=$.

4.



_____ ○ _____



5.



_____ ○ _____



6.



_____ ○ _____



Number Sense Write an amount that makes the statement true.

7. $75\text{¢} > \underline{\hspace{2cm}}$

Problem Solving


Write the total amounts and compare.

8. Ann has 2 quarters.
Joe has 2 dimes and
2 nickels.


Who has more money?

_____ has more money.

How much more? _____



9. Choose the correct symbol.




>

<

=

¢



10.  **Journal** Draw coins to show a value less than 55¢.

