


16-4 and 16-5 Practice



Answer these questions on a separate sheet of paper.



Count the coins. Compare the amounts. Circle $>$, $<$, or $=$.

1.



_____ $>$ _____
_____ $<$ _____
_____ $=$ _____

2.



_____ $>$ _____
_____ $<$ _____
_____ $=$ _____

Write the total amounts and compare them.

Write $>$, $<$, or $=$.

1.



65¢



Choose the correct symbol.

2.



$>$

$<$

$=$

¢



3.



$>$


$<$

$=$

¢



4. **Journal** Which stack of coins is the greater amount of money? Explain.

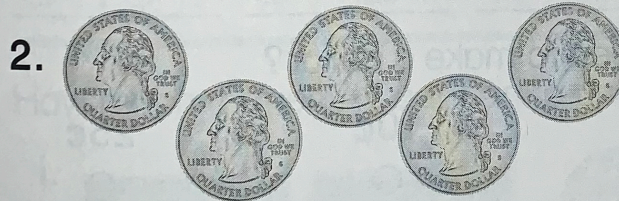


Circle coins to show \$1.00.


Write the number of coins.



_____ dimes = 1 dollar

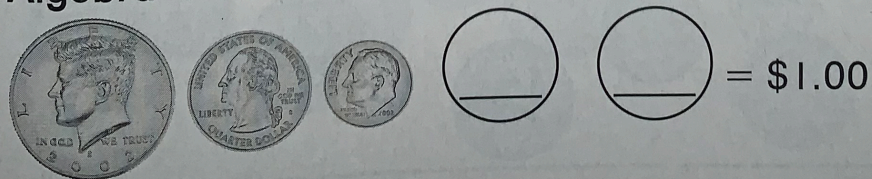


_____ quarters = 1 dollar



_____ half-dollars = 1 dollar


4. Algebra What 2 coins will make the statement true?



Write each total amount.

Circle sets of coins that equal \$1.00.

1.



Total Amount

\$1.00

2.



Total Amount

3. Ed has these coins.



How much money does he need to make a dollar?

1¢

5¢

10¢

25¢

4. **Number Sense** Pam has 4 coins. The coins total 100¢. Circle the coins that Pam has.

